

Lesson 1A HW

Name: _____

Date: _____

Math: _____

Decimal Computation Unit: Reading/Writing Decimals **HOMEWORK**

(Reference page 799 in your book or your notes for help)

1. Fill in the place value chart. Use it for the remaining problems.

_____ / _____ / _____ • _____

2. Write a decimal for the given words.

a. Forty-one ten-thousandths

b. eighteen and five hundred four thousandths

c. seven and sixty-three hundredths

d. sixty-five and two hundred one thousandths

3. Write each decimal in words.

a. 0.06

b. 4.705

c. 145.012

d. 6.020

back →

NAME: _____

DATE: _____

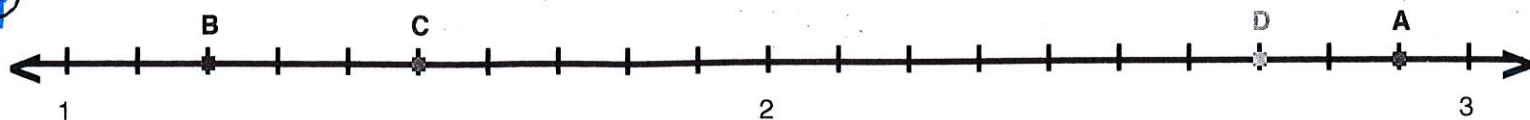
MATH: _____

Homework

Identify decimals
on a number line

DIRECTIONS For each point, identify the decimal
and write it using words.

4)



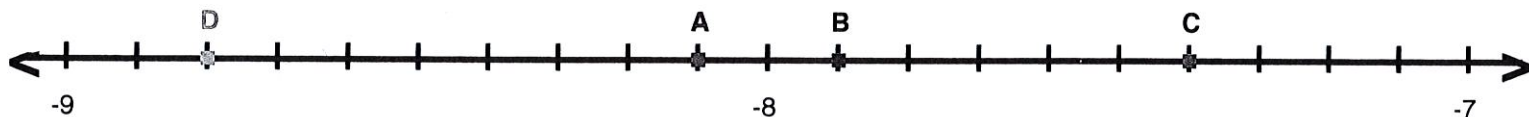
A = _____

B = _____

C = _____

D = _____

2)



A = _____

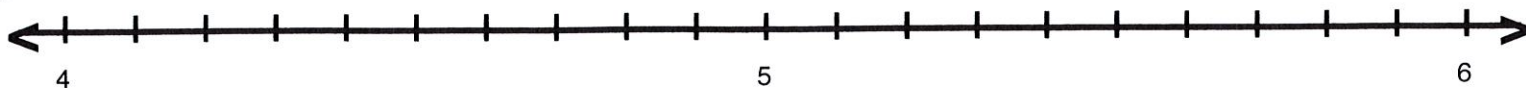
B = _____

C = _____

D = _____

Now, place each letter on the correct point.

6)

A = 4.3B = 5.1C = 4.8D = 4.5